

**Identifying Quadrilateral**

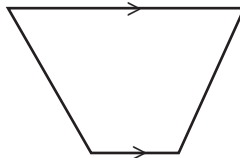
Write the name below each quadrilateral.

1)



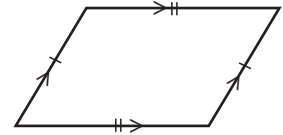
\_\_\_\_\_

2)



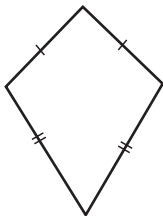
\_\_\_\_\_

3)



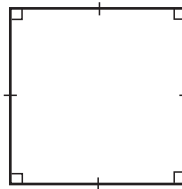
\_\_\_\_\_

4)



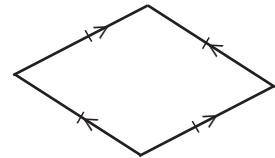
\_\_\_\_\_

5)



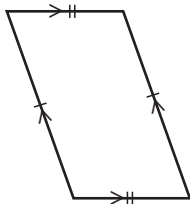
\_\_\_\_\_

6)



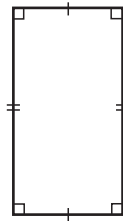
\_\_\_\_\_

7)



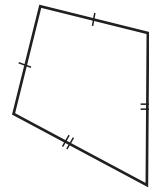
\_\_\_\_\_

8)



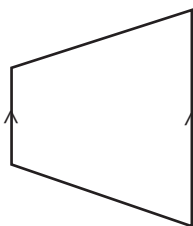
\_\_\_\_\_

9)



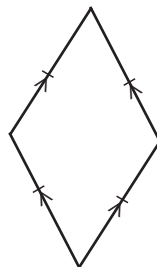
\_\_\_\_\_

10)



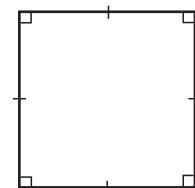
\_\_\_\_\_

11)



\_\_\_\_\_

12)

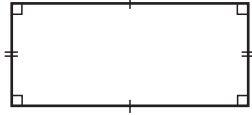


\_\_\_\_\_

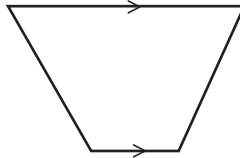
**Answer Key**

Write the name below each quadrilateral.

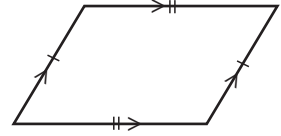
1)

**Rectangle**

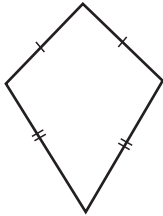
2)

**Trapezoid**

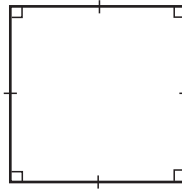
3)

**Parallelogram**

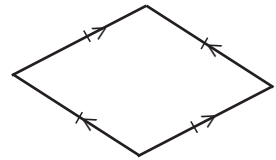
4)

**Kite**

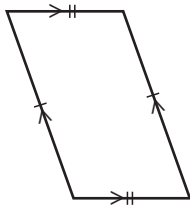
5)

**Square**

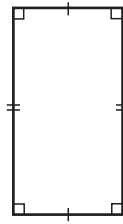
6)

**Rhombus**

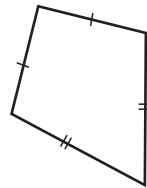
7)

**Parallelogram**

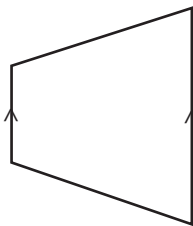
8)

**Rectangle**

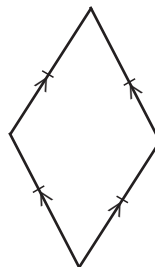
9)

**Kite**

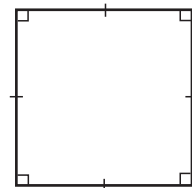
10)

**Trapezoid**

11)

**Rhombus**

12)

**Square**